



Jedes Blatt hat ein Schattenblatt!



A




Eiche

B



Spitzahorn

C



Weißbuche

D




Birke

E



Feldahorn

F



Zitterpappel

G




Rotbuche

H



Holunder

I



Weide

3




Weide

6



Zitterpappel

4



Spitzahorn

5



Weißbuche

1



Rotbuche

7




Eiche

8



Feldahorn

2



Holunder

9



Birke

Wieviel Bäume hast du gewusst?
1-4 Punkte: Beetle
5-9 Punkte: Honeybee